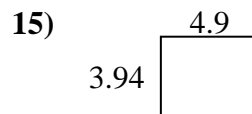
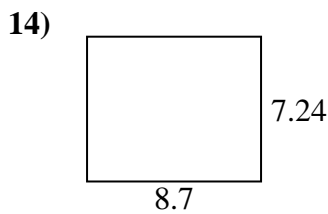
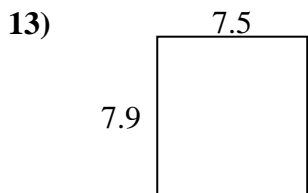
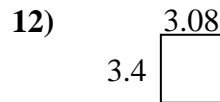
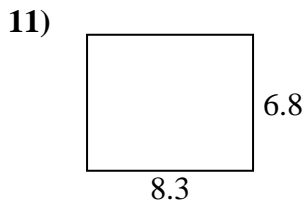
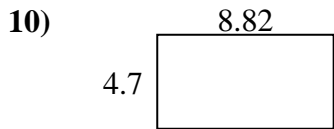
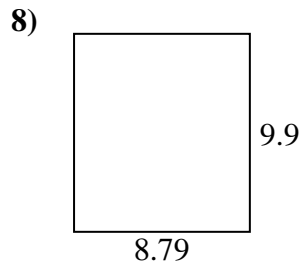
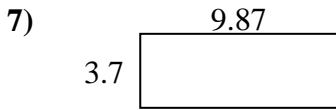
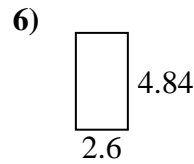
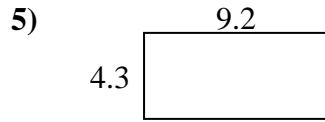
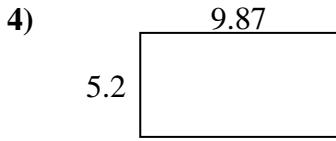
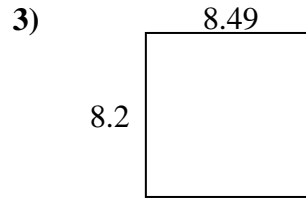
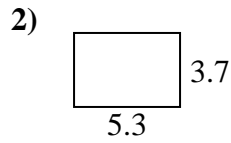
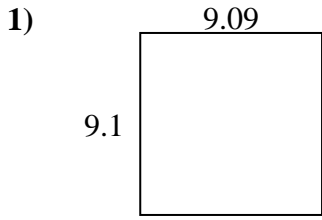
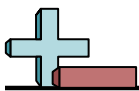


Find the perimeter and area of each figure. Answer to the nearest 10th.

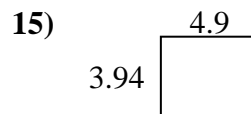
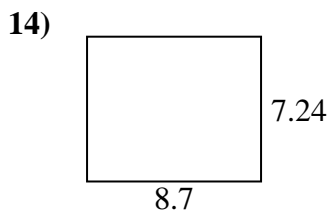
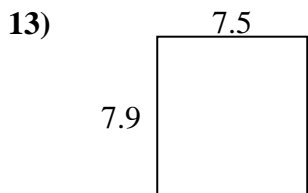
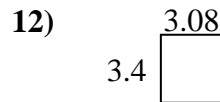
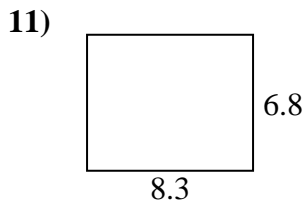
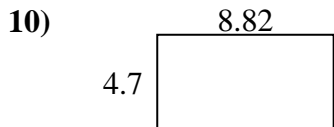
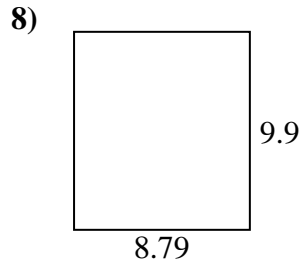
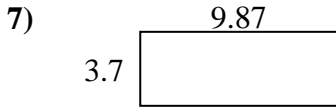
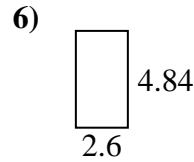
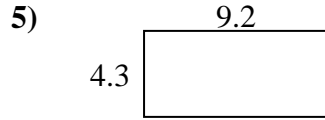
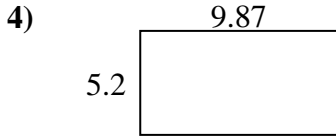
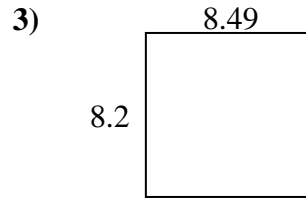
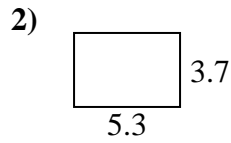
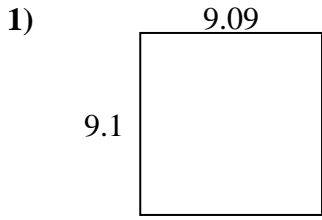


Answers

1. _____
2. _____
3. _____
4. _____
5. _____
6. _____
7. _____
8. _____
9. _____
10. _____
11. _____
12. _____
13. _____
14. _____
15. _____



Find the perimeter and area of each figure. Answer to the nearest 10th.

**Answers**

1.	<u>82.7</u>	<u>36.4</u>
2.	<u>19.6</u>	<u>18.0</u>
3.	<u>69.6</u>	<u>33.4</u>
4.	<u>51.3</u>	<u>30.1</u>
5.	<u>39.6</u>	<u>27.0</u>
6.	<u>12.6</u>	<u>14.9</u>
7.	<u>36.5</u>	<u>27.1</u>
8.	<u>87.0</u>	<u>37.4</u>
9.	<u>21.7</u>	<u>19.0</u>
10.	<u>41.5</u>	<u>27.0</u>
11.	<u>56.4</u>	<u>30.2</u>
12.	<u>10.5</u>	<u>13.0</u>
13.	<u>59.3</u>	<u>30.8</u>
14.	<u>63.0</u>	<u>31.9</u>
15.	<u>19.3</u>	<u>17.7</u>